

93 Which relation is a function?

A

Input	Output
1	2
2	2
3	3
4	3

B

Input	Output
2	6
2	5
6	4
6	3

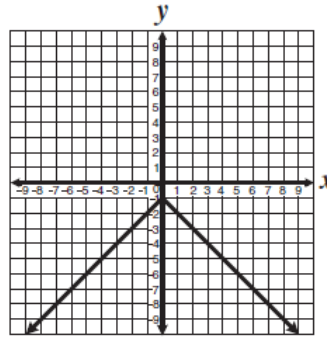
C

Input	Output
1	2
2	4
4	6
4	8

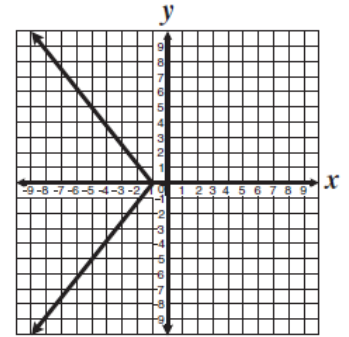
D

Input	Output
0	1
0	2
1	3
1	4

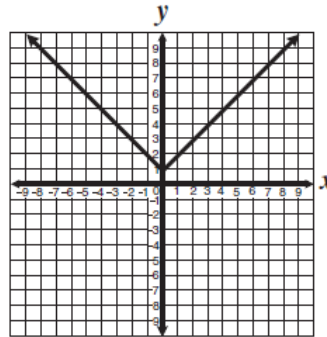
94 For which equation graphed below are *all* the *y*-values negative?



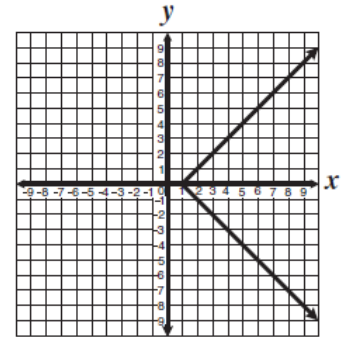
A



C



B



D

Answers

93	A
94	A