

For 23-31, match the numbered functions with their lettered graphs.

23.)  $2^x$

24.)  $(\frac{1}{3})^x$

25.)  $2^x + 1$

26.)  $(\frac{1}{3})^x - 1$

27.)  $(\frac{1}{3})^{(x-1)}$

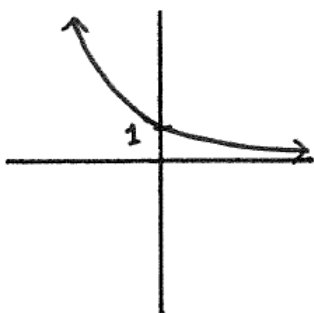
28.)  $-2^x$

29.)  $5(2^x)$

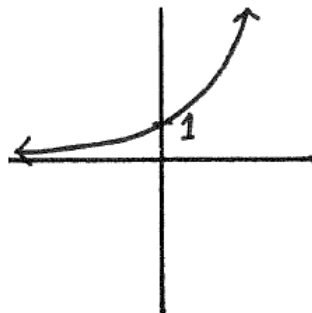
30.)  $-(\frac{1}{3})^x$

31.)  $2^{(x+1)}$

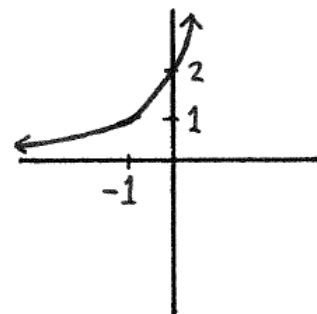
A.)



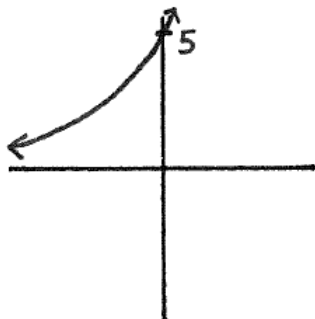
B.)



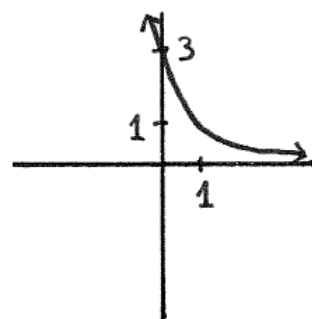
C.)



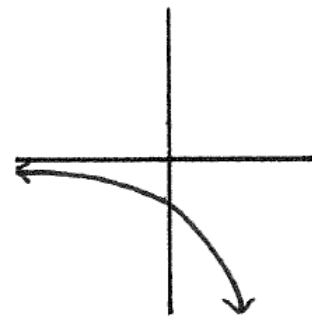
D.)



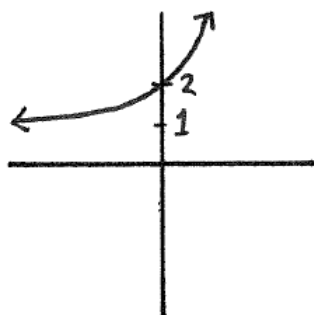
E.)



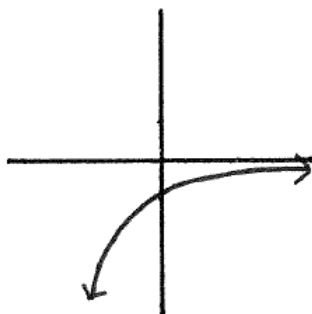
F.)



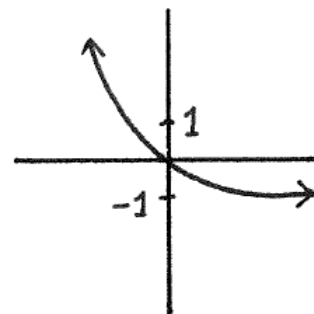
G.)



H.)



I.)



For 32-40, match the numbered functions with their lettered graphs.

32.)  $e^x$

33.)  $(\frac{1}{2})^x$

34.)  $e^x - 1$

35.)  $(\frac{1}{2})^x + 1$

36.)  $(\frac{1}{2})^{(x+1)}$

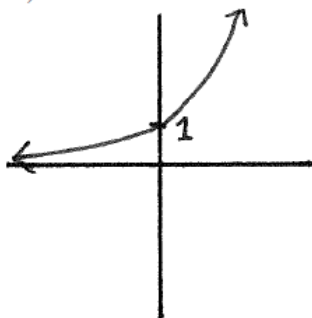
37.)  $-e^x$

38.)  $2(e^x)$

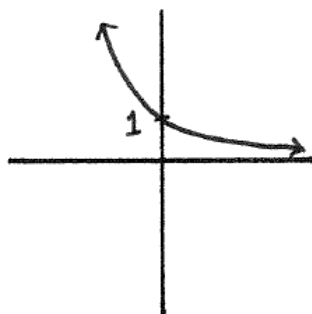
39.)  $-(\frac{1}{2})^x$

40.)  $e^{(x-1)}$

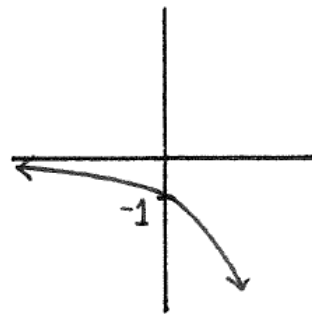
A.)



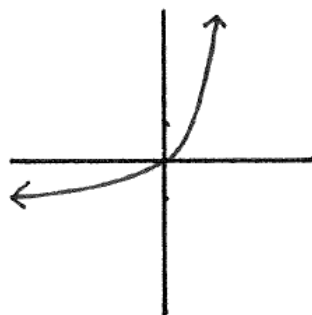
B.)



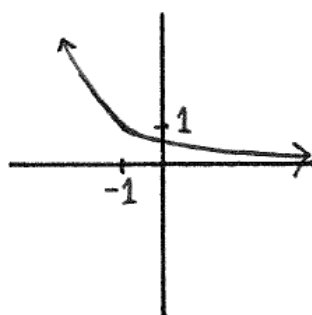
C.)



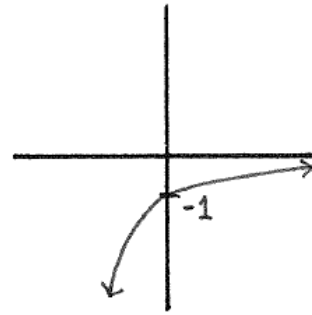
D.)



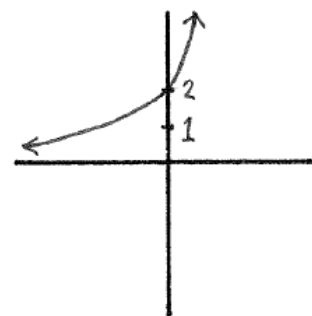
E.)



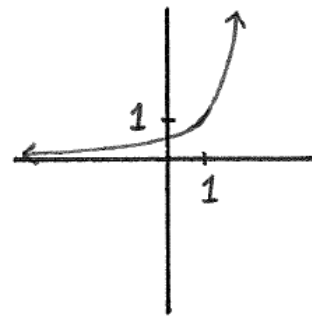
F.)



G.)



H.)



I.)

