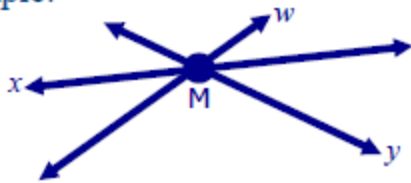


## Points of Concurrency

Concurrent lines are three or more lines that intersect at the same point. The mutual point of intersection is called the **point of concurrency**.

Example:



M is the point of concurrency of lines w, y, and x.

## The Four Centers of a Triangle

In a triangle, the following sets of lines are concurrent:

- The three **medians**.
- The three **altitudes**.
- The **perpendicular bisectors** of each of the three sides of a triangle.
- The three **angle bisectors** of each angle in the triangle.

## Concurrency of the Medians

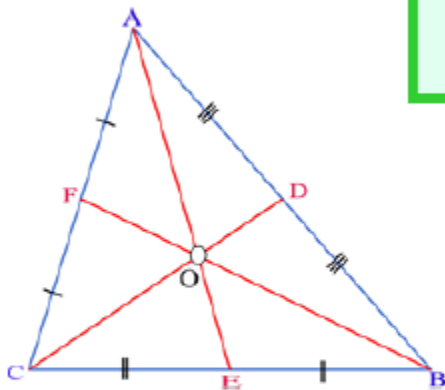
The **median** of a triangle is the line segment that joins the vertex to the midpoint of the opposite side of the triangle.

The three medians of a triangle are concurrent in a point that is called the **centroid**.

There is a special relationship that involves the line segments when all of the three medians meet.

\*\*\*The distance from each vertex to the centroid is two-thirds of the length of the entire median drawn from that vertex\*\*\*

### Let's Take a Look at the Diagram....



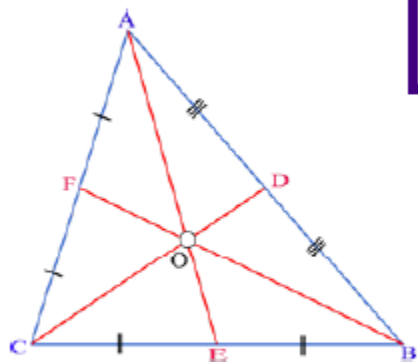
O is the centroid of  $\triangle ABC$ ,  
points D, F, and E are midpoints.

$$\overline{AO} = \frac{2}{3}\overline{AD}$$

$$\overline{BO} = \frac{2}{3}\overline{BE}$$

$$\overline{CO} = \frac{2}{3}\overline{CF}$$

In addition, the distance from each centroid to the opposite side (midpoint) is one-third of the distance of the entire median.



O is the centroid of  $\triangle ABC$ ,  
points D, F, and E are midpoints.

$$\overline{OF} = \frac{1}{3}\overline{BF}$$

$$\overline{OE} = \frac{1}{3}\overline{AE}$$

$$\overline{OD} = \frac{1}{3}\overline{CD}$$

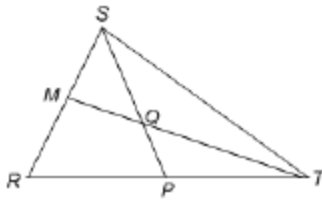
The centroid also divides the median into two segments in the ratio 2:1, such that:

$$\frac{AO}{OE} = \frac{2}{1} \text{ and } \frac{CO}{OD} = \frac{2}{1} \text{ and } \frac{BO}{OF} = \frac{2}{1}$$

If you notice, the bigger part of the ratio is the segment that is drawn from the vertex to the centroid. The smaller part of the median is always the part that is drawn from the centroid to the midpoint of the opposite side.

**When working with these ratios, it is important to never mix the two up!!!**

# Examples:

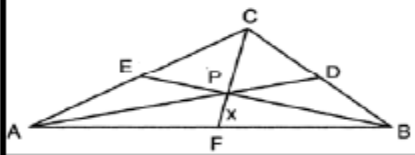


1) In  $\triangle RST$ , medians  $\overline{TM}$  and  $\overline{SP}$  are concurrent at point Q. If  $TQ = 3x-1$  and  $QM = x+1$ , what is the length of median  $\overline{TM}$ ?

2) In  $\triangle ABC$ , points J, K, and L are the midpoints of sides AB, BC, and AC, respectively. If the three medians of the triangle intersect at point P and the length of LP is 6, what is the length of BL?

3) In triangle ABC, medians AD, BE, and CF are concurrent at point P. If  $AD = 24$  inches, find the length of AP.

# More Examples!!!



4) In the diagram Jose found centroid P by constructing the three medians. He measured CF and found it to be 6 inches. If  $PF = x$ , then what equation can be used to find the value of x?

- (1)  $x + x = 6$       (2)  $2x + x = 6$       (3)  $3x + 2x = 6$       (4)  $x + (2/3)x = 6$

## The Coordinates of the Centroid

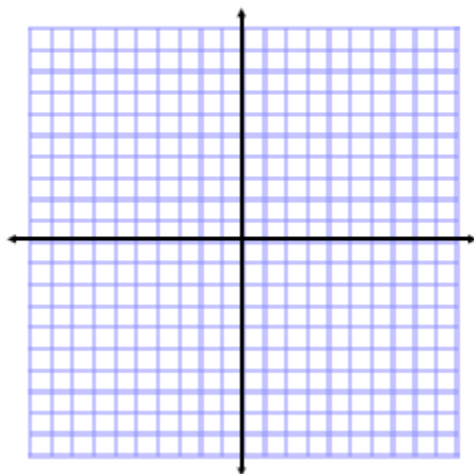
Given three vertices of a triangle:  $(x_1, y_1)$ ,  $(x_2, y_2)$ , and  $(x_3, y_3)$ , the coordinates of the centroid are the **average** of all of those points. Therefore, the coordinates of the centroid can be found by this rule:

$$\left( \frac{x_1 + x_2 + x_3}{3}, \frac{y_1 + y_2 + y_3}{3} \right)$$

This helps to explain the fact that the centroid is the "center of gravity" of a triangle because it is *exactly* in the middle of a triangle.

## Examples

1. Given  $\triangle ABC$  with coordinates  $A(0,0)$ ,  $B(4,0)$ , and  $C(2,6)$ , what are the coordinates of the centroid?



## Examples

2.  $\triangle ABC$  has vertices  $A(-3,3)$ ,  $B(2,5)$ , and  $C(4,-3)$ . What are the coordinates of the centroid of  $\triangle ABC$ ?

