
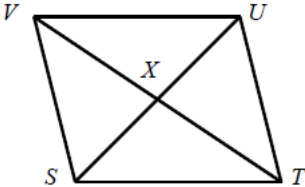



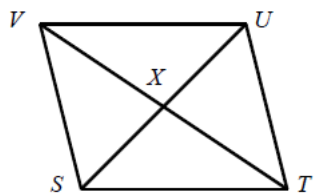
Given:  $\overline{VU} \cong \overline{ST}$  and  $\overline{SV} \cong \overline{TU}$

Prove:  $VX = XT$




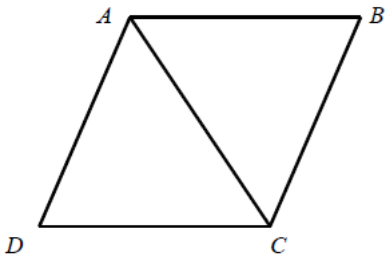
- |   |  |
|---|--|
| <p>1. <math>\overline{VU} \cong \overline{ST}</math> and <math>\overline{SV} \cong \overline{TU}</math></p> <p>2. <math>STUV</math> is a parallelogram</p> <p>3. <math>VX = XT</math></p> | <p>1. Given</p> <p>2. If both pairs of opp. sides of a quad. are <math>\cong</math>, then the quad is a parallelogram.</p> <p>3. The diagonals of a parallelogram bisect each other.</p> |
|---|--|

Given:  $\overline{SV} \cong \overline{TU}$  and  $\overline{SV} \parallel \overline{TU}$   
 Prove:  $VX = XT$




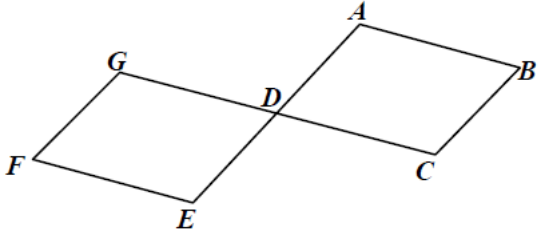
- |  |  |
|--|--|
| 1. $\overline{SV} \cong \overline{TU}$ and $\overline{SV} \parallel \overline{TU}$ | 1. Given   |
| 2. $STUV$ is a parallelogram   | 2. If one pair of opp. sides of a quad. are both $\parallel$ and $\cong$ , then the quad is a parallelogram. |
| 3. $VX = XT$   | 3. The diagonals of a parallelogram bisect each other.   |

Given:  $ABCD$  is a rhombus.  
Prove:  $\triangle BCA \cong \triangle DAC$



- |  |   |
|--|---|
| 1. $ABCD$ is a rhombus                 | 1. Given  |
| 2. $ABCD$ is a a parallelogram         | 2. Definition of a rhombus  |
| 3. $\triangle BCA \cong \triangle DAC$ | 3. The diagonals of a parallelogram form two congruent triangles. |

Given that  $ABCD$  and  $EFGD$  are parallelograms and that  $D$  is the midpoint of  $\overline{CG}$  and  $\overline{AE}$ , prove that  $ABCD$  and  $EFGD$  are congruent.



They should use the def. of midpoint and opposite sides of a parallelogram are  $\cong$  to show that  $\overline{AD} \cong \overline{DE} \cong \overline{FG} \cong \overline{BC}$  and  $\overline{GD} \cong \overline{DC} \cong \overline{AB} \cong \overline{EF}$ . Then, using the vert.  $\angle$  thm. and opposite  $\angle$ 's of a parallelogram are  $\cong$ , show that  $\angle GDE \cong \angle ADC \cong \angle B \cong \angle F$ .  $\angle G \cong \angle E \cong \angle C \cong \angle A$ , since opposite angles are = and add to  $360^\circ$  in a parallelogram. Therefore  $ABCD \cong EFGD$  because their corresponding sides and corresponding  $\angle$ 's  $\cong$ .