

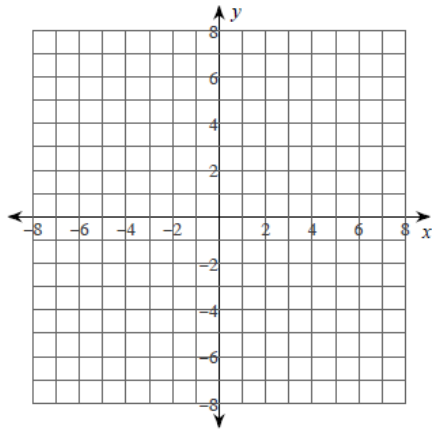
Absolute Maximum and Absolute Minimum

Set 3

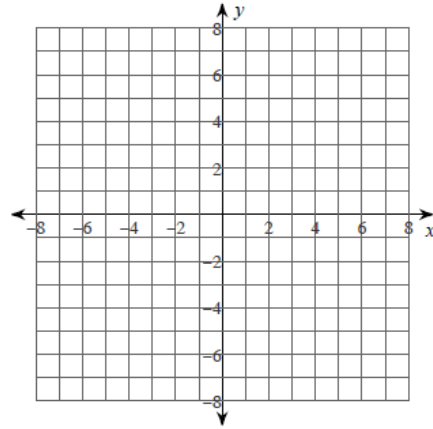
Curve Sketching and Abs Extrema

For each problem, find all points of absolute minima and maxima on the given interval. You may use the provided graph to sketch the function.

1) $y = -\frac{4x}{x^2 + 4}; [-5, 0]$



2) $y = 2x^2 - 1; [-2, 1]$



Absolute Maximum and Absolute Minimum

Set 3

Answers

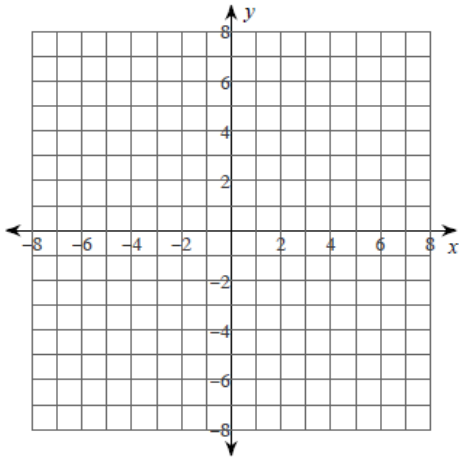
1) Absolute minimum: $(0, 0)$
Absolute maximum: $(-2, 1)$

2) Absolute minimum: $(0, -1)$
Absolute maximum: $(-2, 7)$

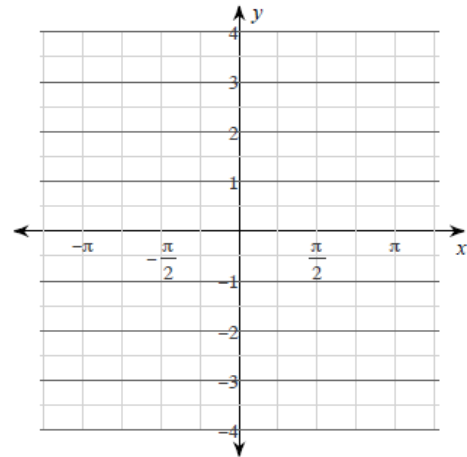
Absolute Maximum and Absolute Minimum

Set 3

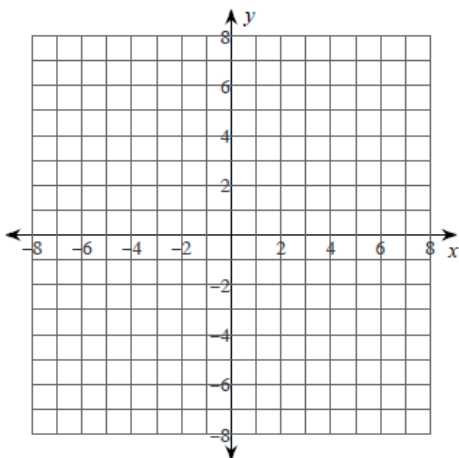
3) $y = -\frac{x^2}{3x+6}$; $[-6, -3]$



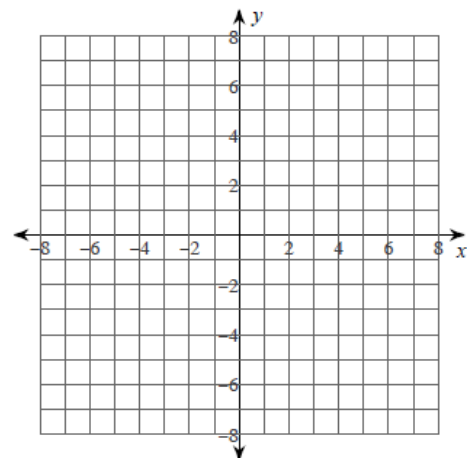
4) $y = \sin(x)$; $[-\frac{3\pi}{4}, 0]$



5) $y = -x^3 + 3x^2$; $[0, 3]$



6) $y = x^2 - 6x + 9$; $[3, 5]$



Absolute Maximum and Absolute Minimum

Set 3

Answers

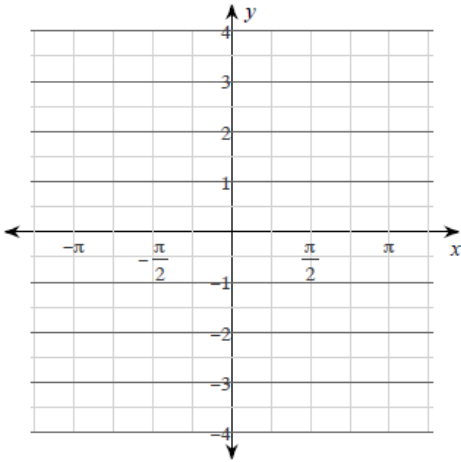
- 3) Absolute minimum: $\left(-4, \frac{8}{3}\right)$
Absolute maxima: $(-6, 3), (-3, 3)$
- 5) Absolute minima: $(0, 0), (3, 0)$
Absolute maximum: $(2, 4)$

- 4) Absolute minimum: $\left(-\frac{\pi}{2}, -1\right)$
Absolute maximum: $(0, 0)$
- 6) Absolute minimum: $(3, 0)$
Absolute maximum: $(5, 4)$

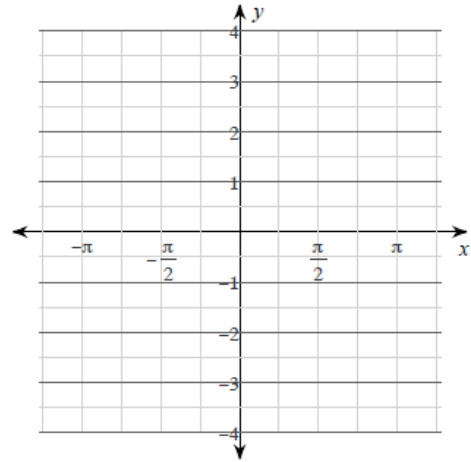
Absolute Maximum and Absolute Minimum

Set 3

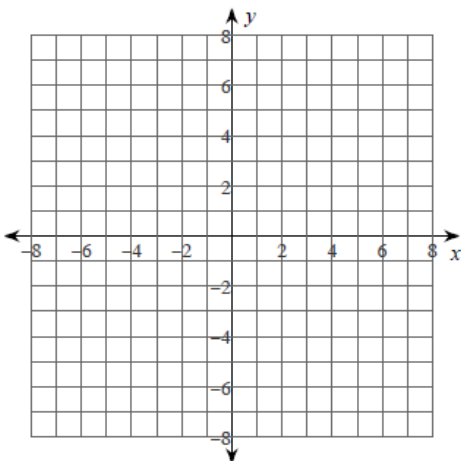
7) $y = \cot(x)$; $[\frac{\pi}{4}, \frac{\pi}{3}]$



8) $y = \cot(x)$; $[-\frac{\pi}{2}, -\frac{\pi}{3}]$



9) $y = x^4 - 2x^2 + 2$; $[-1, 1]$



Absolute Maximum and Absolute Minimum

Set 3

Answers

7) Absolute minimum: $\left(\frac{\pi}{3}, \frac{\sqrt{3}}{3}\right)$
Absolute maximum: $\left(\frac{\pi}{4}, 1\right)$

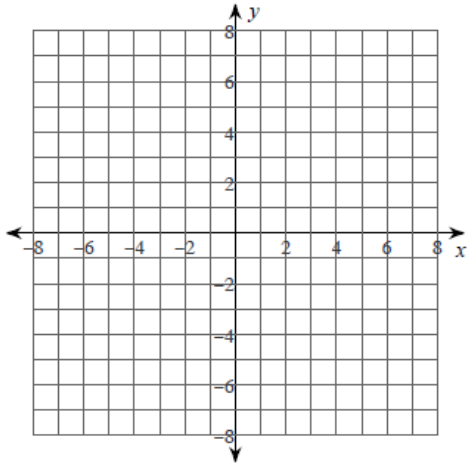
8) Absolute minimum: $\left(-\frac{\pi}{3}, -\frac{\sqrt{3}}{3}\right)$
Absolute maximum: $\left(-\frac{\pi}{2}, 0\right)$

9) Absolute minima: $(-1, 1), (1, 1)$
Absolute maximum: $(0, 2)$

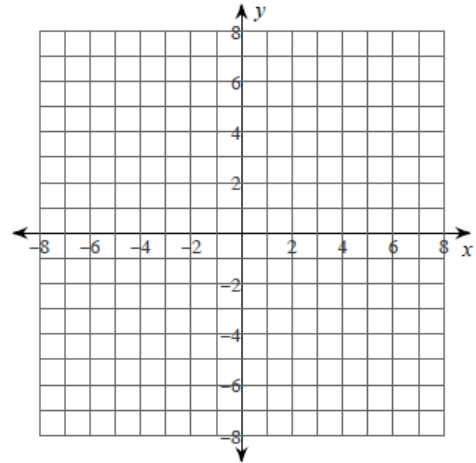
Absolute Maximum and Absolute Minimum

Set 3

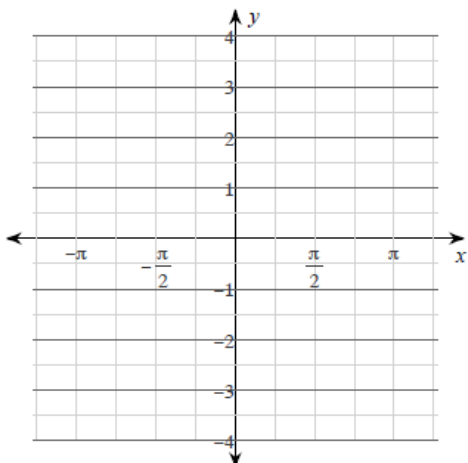
10) $y = -\frac{x^2}{2} + 1; [-3, 3]$



11) $y = x^3 - 3x^2; [0, 3]$



12) $y = \tan(2x); [-\frac{\pi}{2}, \frac{\pi}{2}]$



Absolute Maximum and Absolute Minimum

Set 3

Answers

10) Absolute minima: $\left(-3, -\frac{7}{2}\right), \left(3, -\frac{7}{2}\right)$

11) Absolute minimum: $(2, -4)$
Absolute maxima: $(0, 0), (3, 0)$

Absolute maximum: $(0, 1)$

12) No absolute minima.
No absolute maxima.