

## Radical Functions ... Set 2

### Graphing Radicals

Identify the domain and range of each.

1)  $y = \sqrt{x-2} + 5$

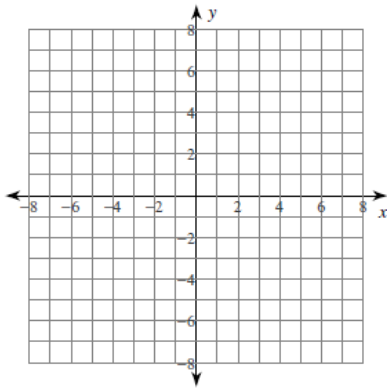
2)  $y = \sqrt{x+2} - 3$

3)  $y = \sqrt[3]{x+1} - 4$

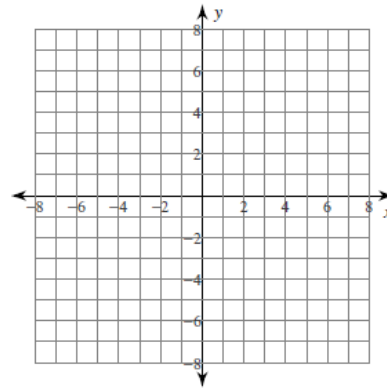
4)  $y = \sqrt[3]{x-1} - 1$

Sketch the graph of each function.

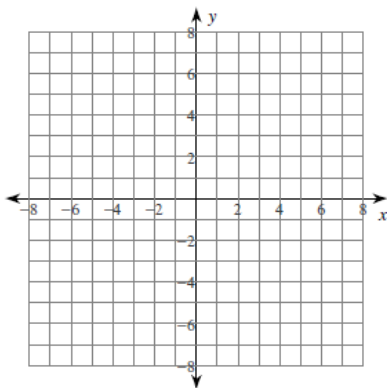
5)  $y = \sqrt{x} + 5$



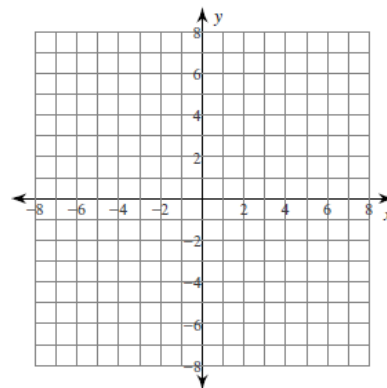
6)  $y = \sqrt{x} - 2$



7)  $y = 3 + \sqrt{x}$



8)  $y = \sqrt{x} + 4$



## Radical Functions ... Set 2

### Answers

Identify the domain and range of each.

1)  $y = \sqrt{x-2} + 5$

Domain:  $x \geq 2$

Range:  $y \geq 5$

2)  $y = \sqrt{x+2} - 3$

Domain:  $x \geq -2$

Range:  $y \geq -3$

3)  $y = \sqrt[3]{x+1} - 4$

Domain: { All real numbers. }

Range: { All real numbers. }

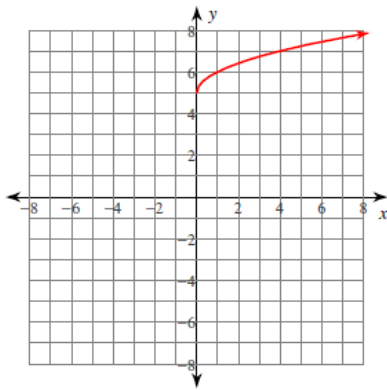
4)  $y = \sqrt[3]{x-1} - 1$

Domain: { All real numbers. }

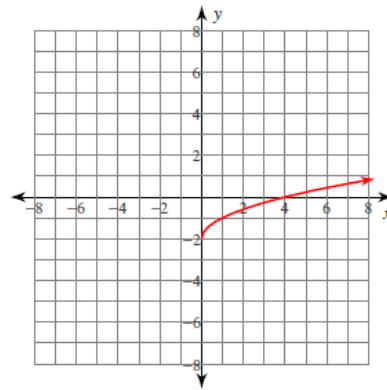
Range: { All real numbers. }

Sketch the graph of each function.

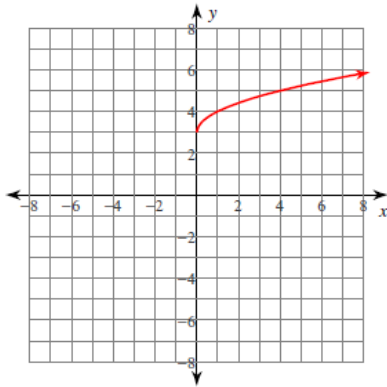
5)  $y = \sqrt{x} + 5$



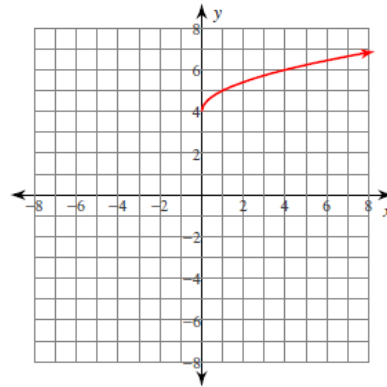
6)  $y = \sqrt{x} - 2$



7)  $y = 3 + \sqrt{x}$

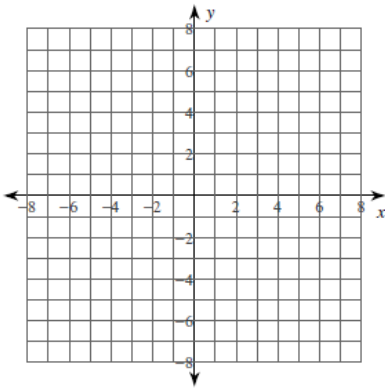


8)  $y = \sqrt{x} + 4$

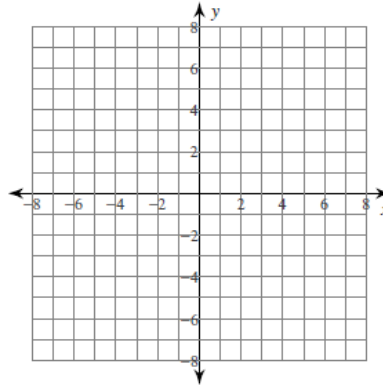


## Radical Functions ... Set 2

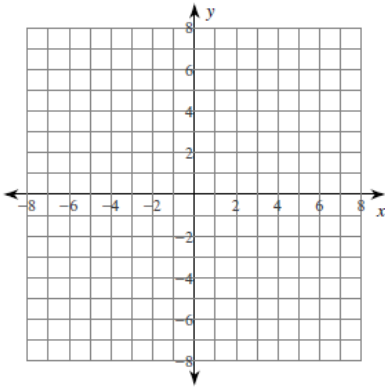
9)  $y = -2\sqrt{x+2}$



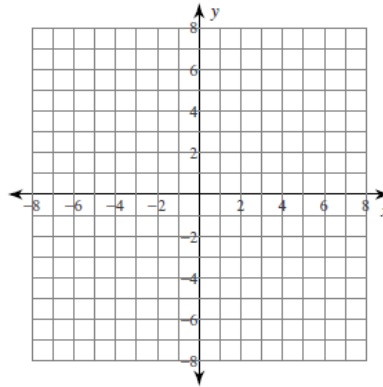
10)  $y = \frac{1}{2}\sqrt[3]{x+1} + 4$



11)  $y = \sqrt{x-4} - 2$

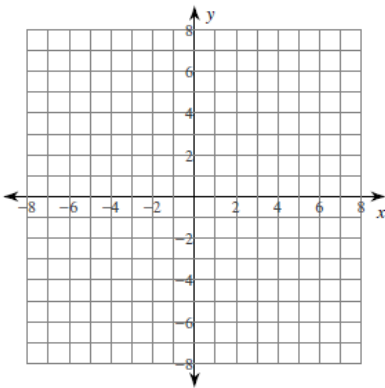


12)  $y = -2 + \sqrt[3]{x}$

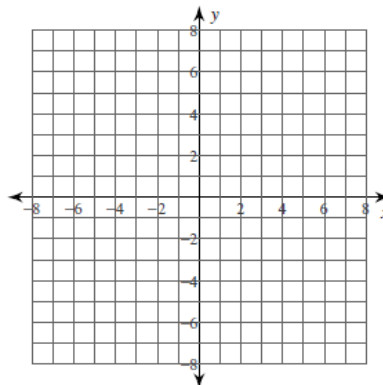


Identify the domain and range of each. Then sketch the graph.

13)  $y = 4\sqrt{x-2} - 1$



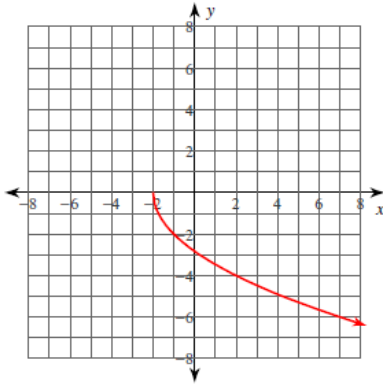
14)  $y = -\frac{3}{4}\sqrt{x-1} + 4$



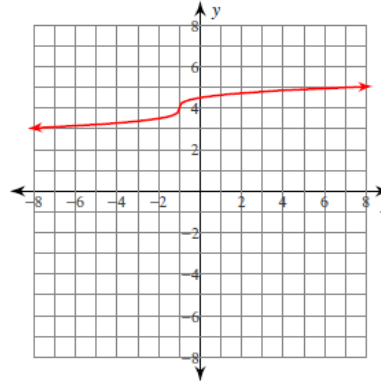
# Radical Functions ... Set 2

## Answers

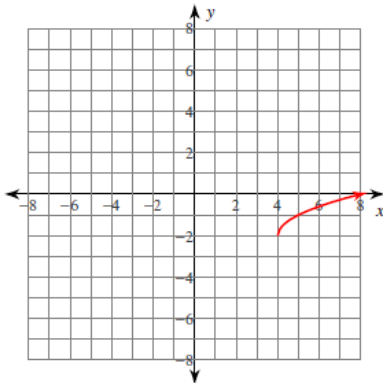
9)  $y = -2\sqrt{x+2}$



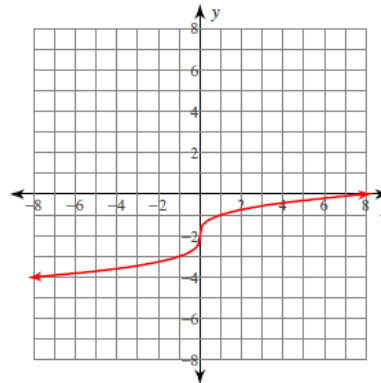
10)  $y = \frac{1}{2}\sqrt[3]{x+1} + 4$



11)  $y = \sqrt{x-4} - 2$

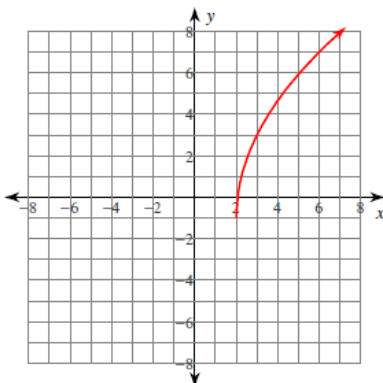


12)  $y = -2 + \sqrt[3]{x}$



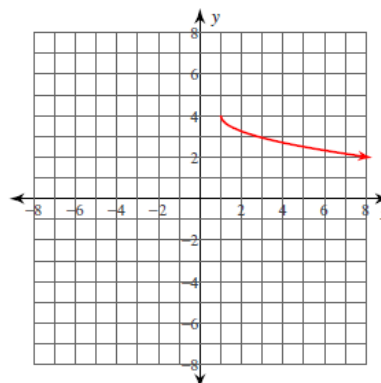
Identify the domain and range of each. Then sketch the graph.

13)  $y = 4\sqrt{x-2} - 1$



Domain:  $x \geq 2$   
Range:  $y \geq -1$

14)  $y = -\frac{3}{4}\sqrt{x-1} + 4$



Domain:  $x \geq 1$   
Range:  $y \leq 4$