

More on Trigonometric Ratios ... Set 2

Solving Proportions Worksheet

Each problem could be set up this way:

- | | |
|--|--------------------------------|
| 1. Write the proportion. | $\frac{8}{3} = \frac{192}{n}$ |
| 2. Write the cross products | $8 \cdot n = 192 \cdot 3$ |
| 3. Multiply | $8n = 576$ |
| 4. Undo multiplication by using division | $\frac{8n}{8} = \frac{576}{8}$ |
| 5. Divide | $n = 72$ |

Solve each proportion. Be sure to set it up the correct way and show all work.

1. $\frac{4}{9} = \frac{10}{x}$

2. $\frac{5}{2} = \frac{x}{6}$

3. $\frac{5}{2} = \frac{2}{x}$

4. $\frac{21}{27} = \frac{x}{18}$

5. $\frac{15}{21} = \frac{20}{y}$

6. $\frac{b}{26} = \frac{39}{9}$

7. $\frac{h}{108} = 0.435$

8. $4.56 = \frac{70}{w}$

9. $0.65 = \frac{j}{15}$

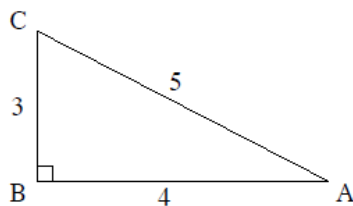
10. $\frac{350}{p} = 0.25$

11. $\frac{q}{1134} = 0.95$

12. $1.75 = \frac{z}{104}$

More on Trigonometric Ratios ... Set 2

The Right Triangle Trigonometric Ratios – Although we won't prove this fact until a future geometry course, all right triangles that have a common acute angle are similar. Thus, the ratios of their corresponding sides are equal. A very long time ago, these ratios were given names. These trigonometric ratios (trig ratios) will be introduced through the following exercises, each of which refer to the diagram below.



In a right triangle:

$\text{tangent of an angle} = \frac{\text{leg opposite of the angle}}{\text{leg adjacent to the angle}}$
--

Exercise #3: $\tan A =$ $\tan C =$

$\text{sine of an angle} = \frac{\text{leg opposite of the angle}}{\text{hypotenuse}}$
--

Exercise #4: $\sin A =$ $\sin C =$

$\text{cosine of an angle} = \frac{\text{leg adjacent to the angle}}{\text{hypotenuse}}$
--

Exercise #5: $\cos A =$ $\cos C =$

A Helpful Mnemonic For Remembering the Ratios:

SOH-CAH-TOA

Sine is **O**pposite over **H**ypotenuse – Cosine is **A**djacent over **H**ypotenuse – Tangent is **O**pposite over **A**djacent

Exercise #3: Find each of the following ratios for the right triangle shown below.

(a) $\sin A =$

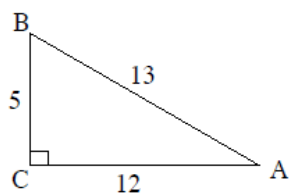
(b) $\tan B =$

(c) $\cos A =$

(d) $\tan A =$

(e) $\cos B =$

(f) $\sin B =$



More on Trigonometric Ratios ... Set 2

Similar Right Triangles - Introduction to Trigonometry Algebra 1 Homework

Skills

For problems 1 – 6, use the triangle to the right to find the given trigonometric ratios.

1. $\cos N =$

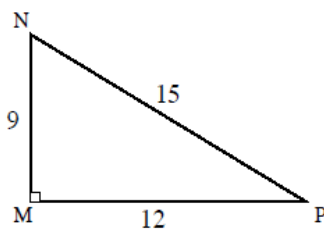
2. $\sin N =$

3. $\tan N =$

4. $\sin P =$

5. $\cos P =$

6. $\tan P =$



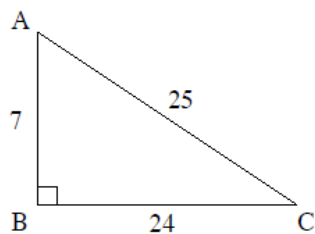
7. Given the right triangle shown, which of the following represents the value of $\tan A$?

(1) $\frac{25}{24}$

(3) $\frac{7}{24}$

(2) $\frac{24}{7}$

(4) $\frac{24}{25}$



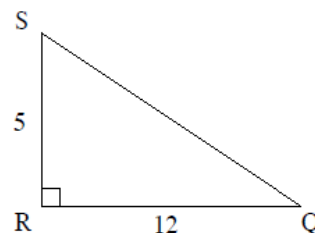
8. In the right triangle below, $\cos Q = ?$

(1) $\frac{12}{5}$

(3) $\frac{12}{17}$

(2) $\frac{5}{12}$

(4) $\frac{12}{13}$

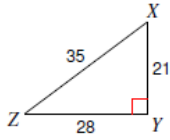


More on Trigonometric Ratios ... Set 2

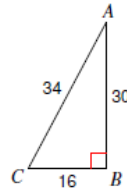
Trigonometric Ratios

Find the value of each trigonometric ratio.

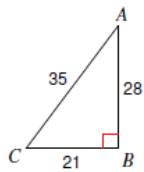
1) $\tan Z$



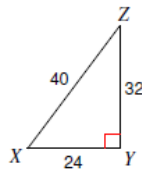
2) $\cos C$



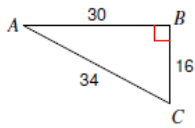
3) $\sin C$



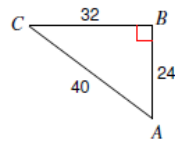
4) $\tan X$



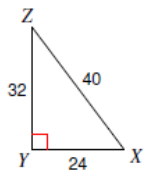
5) $\cos A$



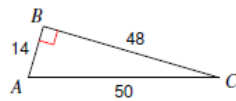
6) $\sin A$



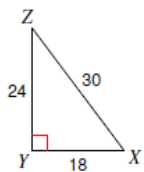
7) $\sin Z$



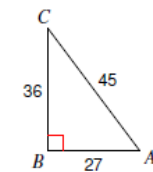
8) $\sin C$



9) $\cos Z$



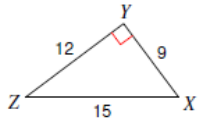
10) $\tan C$



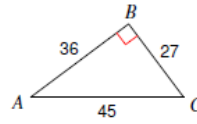
More on Trigonometric Ratios ... Set 2

Find the value of each trigonometric ratio to the nearest ten-thousandth.

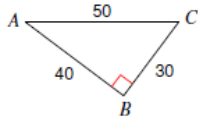
11) $\cos Z$



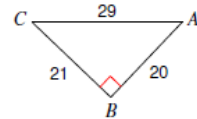
12) $\cos C$



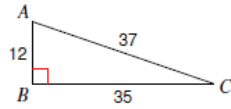
13) $\tan C$



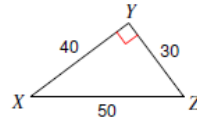
14) $\tan A$



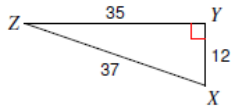
15) $\tan C$



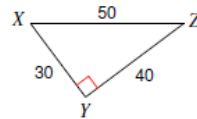
16) $\tan X$



17) $\sin Z$



18) $\sin Z$



19) $\sin 48^\circ$

20) $\sin 38^\circ$

21) $\cos 61^\circ$

22) $\cos 51^\circ$

Critical thinking questions:

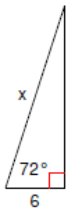
23) Can the sine of an angle ever equal 2?
Why or why not?

24) $\sin x = \frac{1}{3}$
Find $\cos x$.

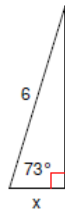
More on Trigonometric Ratios ... Set 2

Find the missing side. Round to the nearest tenth.

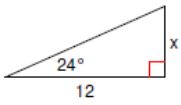
1)



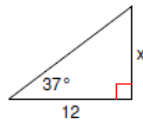
2)



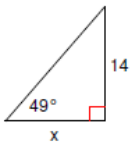
3)



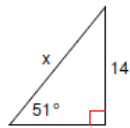
4)



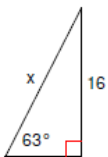
5)



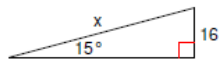
6)



7)

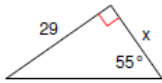


8)

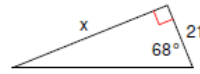


More on Trigonometric Ratios ... Set 2

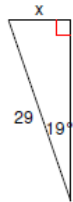
9)



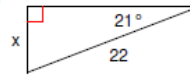
10)



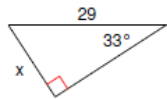
11)



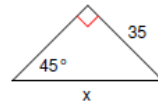
12)



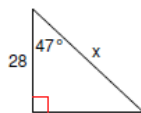
13)



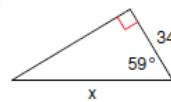
14)



15)



16)



Critical thinking question:

- 17) Write a new problem that is similar to the others on this worksheet. Solve the question you wrote.

More on Trigonometric Ratios ... Set 2

Using Trigonometry to Solve for Missing Sides Algebra 1 Homework

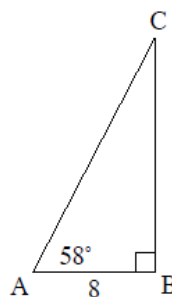
Skill

In problems 1 through 3, determine the trigonometric ratio needed to solve for the missing side and then use this ratio to find the missing side.

1. In right triangle ABC , $m\angle A = 58^\circ$ and $AB = 8$. Find the length of each of the following. Round your answers to the nearest *tenth*.

(a) BC

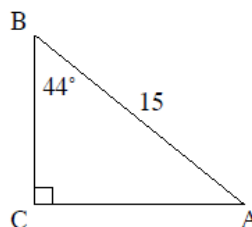
(b) AC



2. In right triangle ABC , $m\angle B = 44^\circ$ and $AB = 15$. Find the length of each of the following. Round your answers to the nearest *tenth*.

(a) AC

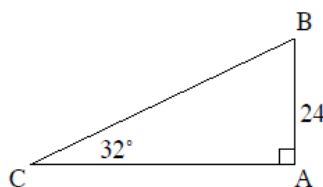
(b) BC



3. In right triangle ABC , $m\angle C = 32^\circ$ and $AB = 24$. Find the length of each of the following. Round your answers to the nearest *tenth*.

(a) AC

(b) BC



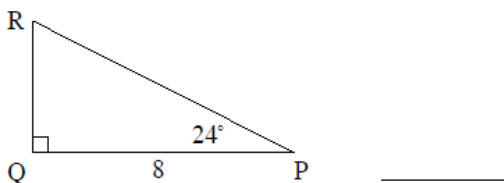
4. Which of the following would give the length of hypotenuse \overline{PR} in the diagram below?

(1) $8 \cos(24^\circ)$

(3) $8 \tan(24^\circ)$

(2) $\frac{8}{\cos(24^\circ)}$

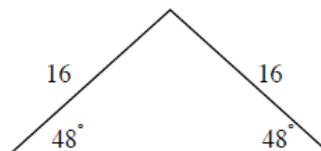
(4) $\frac{8}{\tan(24^\circ)}$



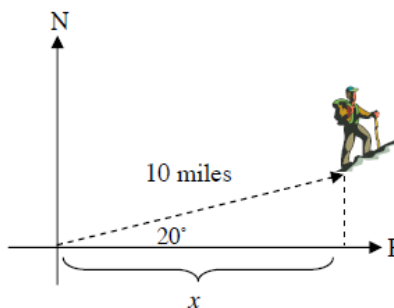
More on Trigonometric Ratios ... Set 2

Applications

5. An isosceles triangle has legs of length 16 and base angles that measure 48° . Find the height of the isosceles triangle to the *nearest tenth*. Hint – Create a right triangle by drawing the height.



6. Carlos walked 10 miles at an angle of 20° north of due east. To the nearest tenth of a mile, how far east, x , is Carlos from his starting point?



7. Students are trying to determine the height of the flagpole at Arlington High. They have measured out a horizontal distance of 40 feet from the flagpole and site the top of it at an angle of elevation of 52° . What is the height, h , of the flagpole? Round your answer to the nearest *tenth* of a foot.

