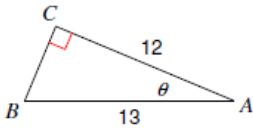


Solving Right Triangles ... Set 3

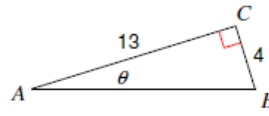
Right Triangle Trig. - Finding Missing Sides and Angles

Find the measure of each angle indicated. Round to the nearest tenth.

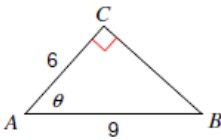
1)



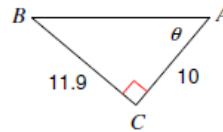
2)



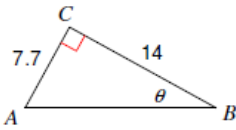
3)



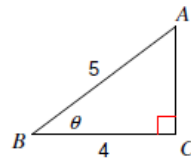
4)



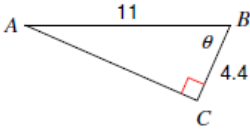
5)



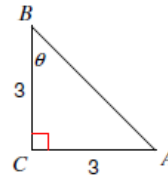
6)



7)

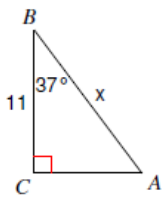


8)

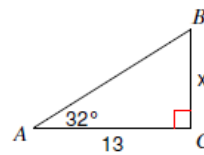


Find the measure of each side indicated. Round to the nearest tenth.

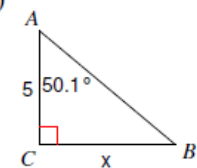
9)



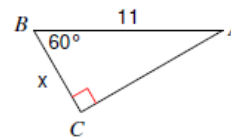
10)



11)



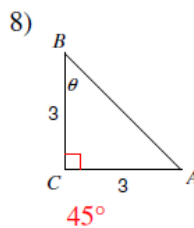
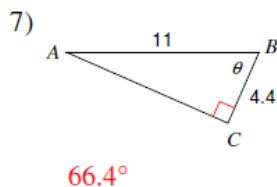
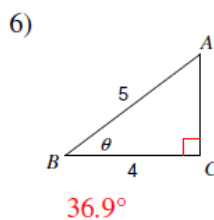
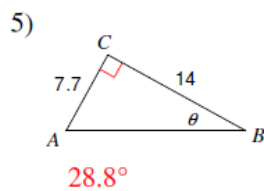
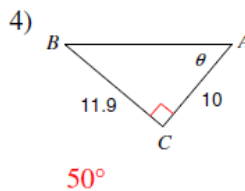
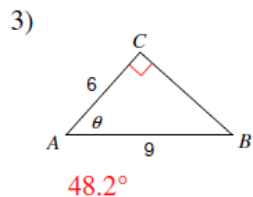
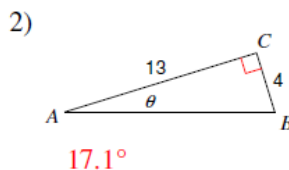
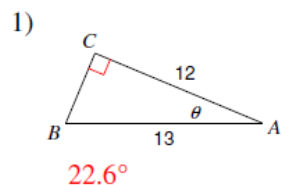
12)



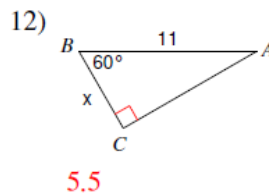
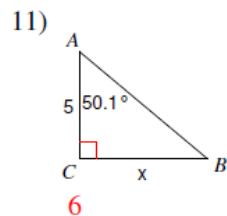
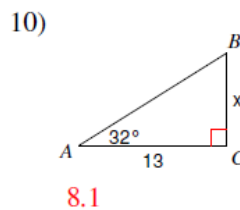
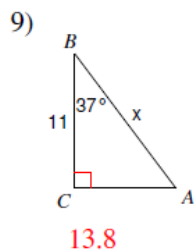
Solving Right Triangles ... Set 3

Answers

Find the measure of each angle indicated. Round to the nearest tenth.

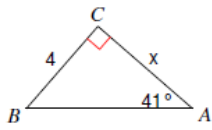


Find the measure of each side indicated. Round to the nearest tenth.

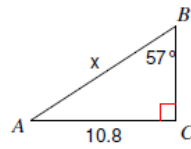


Solving Right Triangles ... Set 3

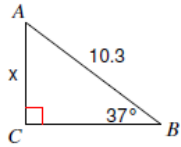
13)



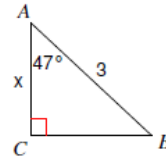
14)



15)

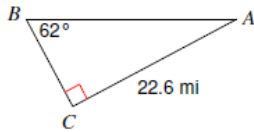


16)

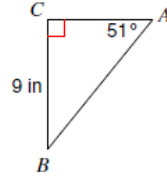


Solve each triangle. Round answers to the nearest tenth.

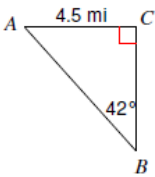
17)



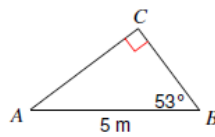
18)



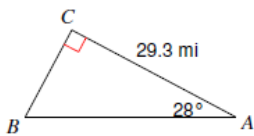
19)



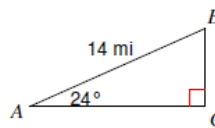
20)



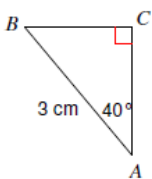
21)



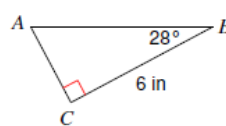
22)



23)



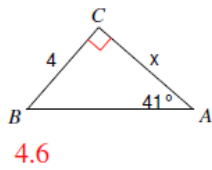
24)



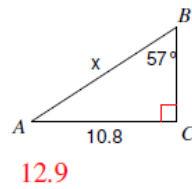
Solving Right Triangles ... Set 3

Answers

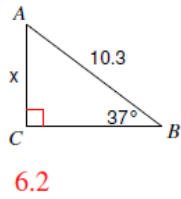
13)



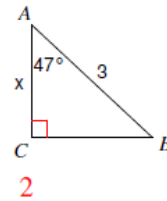
14)



15)

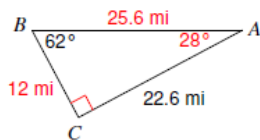


16)

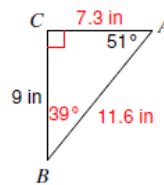


Solve each triangle. Round answers to the nearest tenth.

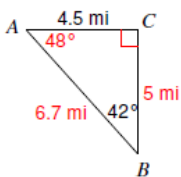
17)



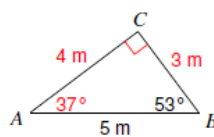
18)



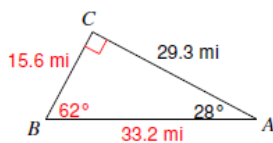
19)



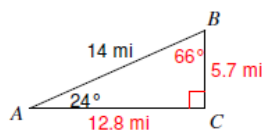
20)



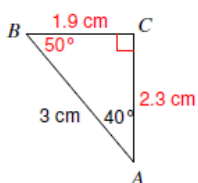
21)



22)



23)



24)

